





Solve each problem.

Answers


1) Which letter best shows -29?




2) Which letter best shows -120?




3) Which letter best shows -118?




4) Which letter best shows -14?




5) Which letter best shows -109?




6) Which letter best shows -28?




7) Which letter best shows -21?




8) Which letter best shows -14?



9) Which letter best shows -13?



10) Which letter best shows -114?

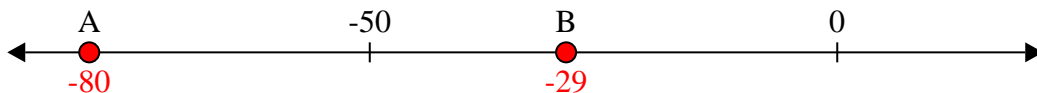


1. _____
2. _____
3. _____
4. _____
5. _____
6. _____
7. _____
8. _____
9. _____
10. _____




Solve each problem.


1) Which letter best shows -29?



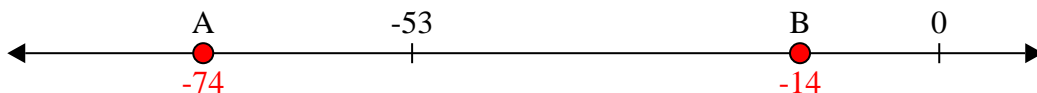
2) Which letter best shows -120?




3) Which letter best shows -118?




4) Which letter best shows -14?



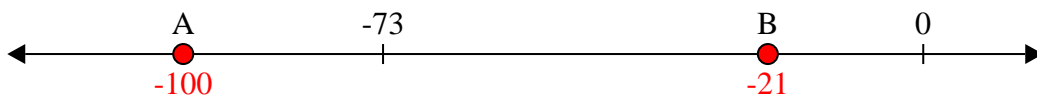
5) Which letter best shows -109?




6) Which letter best shows -28?




7) Which letter best shows -21?




8) Which letter best shows -14?



9) Which letter best shows -13?



10) Which letter best shows -114?



Answers

1. **B**

2. **A**

3. **A**

4. **B**

5. **A**

6. **B**

7. **B**

8. **B**

9. **B**

10. **A**